

PRIMARY DEPARTMENT

Session- 2025-26

Assignment 1

Subject: Maths

Date: _____

Name: _____ Class I/Sec: _____ Roll No. _____

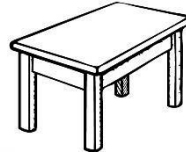

Unit 1 Grouping

Q1. Colour the odd one out in each group.

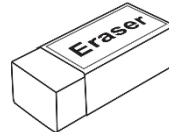

a)



b)





c)




Unit 2 Pre-Number Vocabulary

Q1. Circle the duck outside the pond and colour any one duck inside the pond.




Q2. Colour the tallest giraffe.




Q3. Look at the pictures and fill in the blanks.

(i)




Basket Ball

(ii)



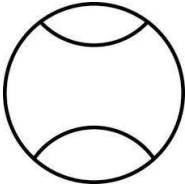
Football

(iii)



Cricket Ball

(iv)




Tennis Ball


- a) _____ is the biggest in size.
- b) _____ is the smallest in size.

Unit 3 One to Nine and zero



Q4. The dog moves one step at a time. Complete the series of backward counting to help the dog reach the bone.



10					5				
----	--	--	--	--	---	--	--	--	--



Q5. Count and write the number and number names

	<div><div></div><div></div></div>
	<div><div></div><div></div></div>

Unit 4 Numbers from 10-20

Q6. Match the correct number name for the given numbers.

- a. 8

Seventeen
- b. 17

Eight
- c. 11

Eleven

Q7. Circle the correct number for each number name.

a.	twelve	12	16	6
b.	eight	11	8	13